


Name _____




Date _____

HR _____

Unit 2 Study Guide: Multiplication and Geometry

- ① a. Draw all the arrays for 24.



b. List the factors of 24. _____

- ② List the first 10 multiples of 6.

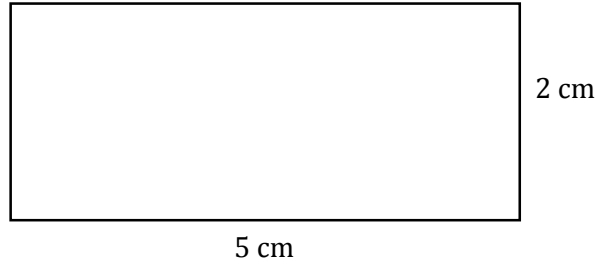
_____, _____, _____, _____, _____, _____, _____, _____, _____, _____

Unit 2 Study Guide

3. Find the area of the rectangle.

a. Length _____ cm

Width _____ cm



Area: _____ square centimeters

b. Explain how you found the area.

4.

a. Find the number of minutes.

Hours	Minutes
1	
3	
6	
8	


b. Explain how you found how many minutes are in 6 hours.

Unit 2 Study Guide

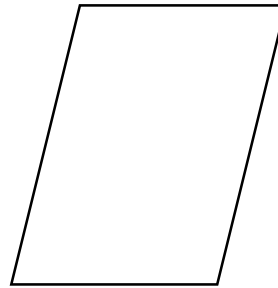
5. Should you add or multiply to find the answer to the question below? Explain.

Lawrence read for 12 minutes.
Maya read 4 times as long.
How long did Maya read?

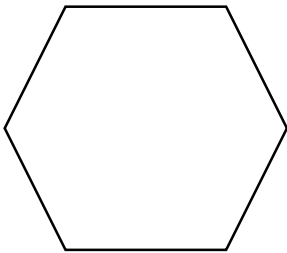
6. Circle any right angle or write none.



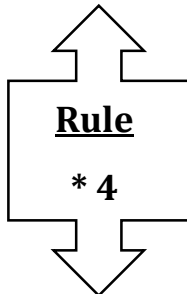
7. Name two properties of the quadrilateral.



8. Draw at least one line of symmetry in the shape.



9. Solve this "What's My Rule?" table.



In	Out
2	
	20
7	
	48